
GEOGRAPHY

9696/33

Paper 3 Advanced Human Options

October/November 2015

INSERT

1 hour 30 minutes

READ THESE INSTRUCTIONS FIRST

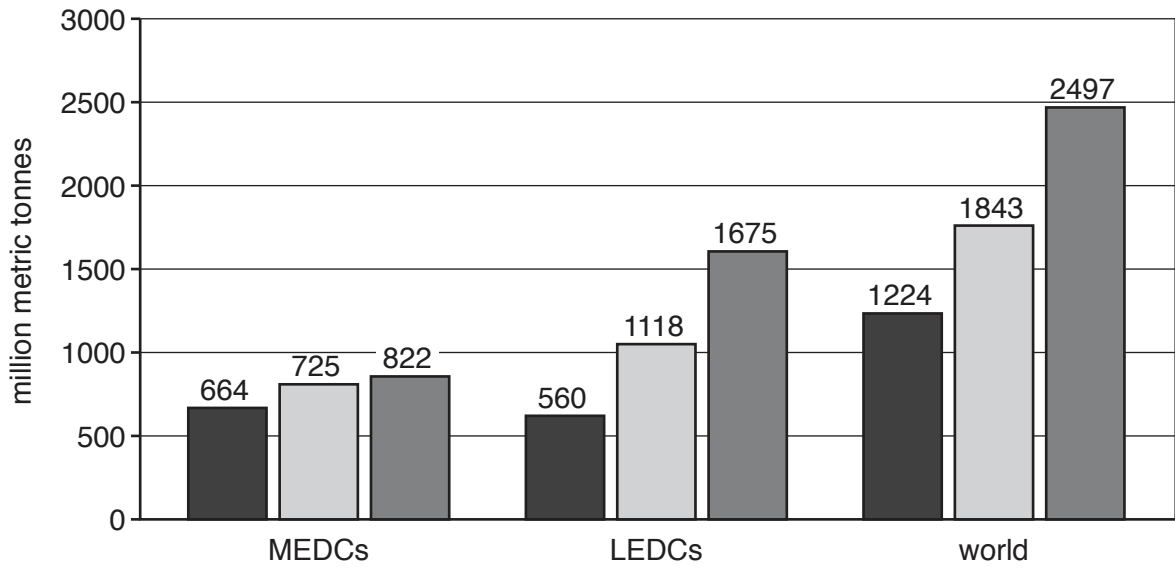
This Insert contains all the Figures referred to in the questions.



This document consists of **5** printed pages and **3** blank pages.

Fig. 1 for Question 1

Food demand for MEDCs, LEDCs and the world in 1974 and 1997 and forecasts for 2020



Key

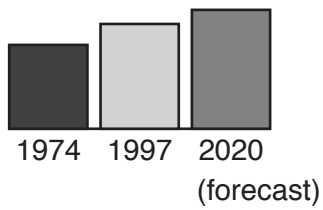
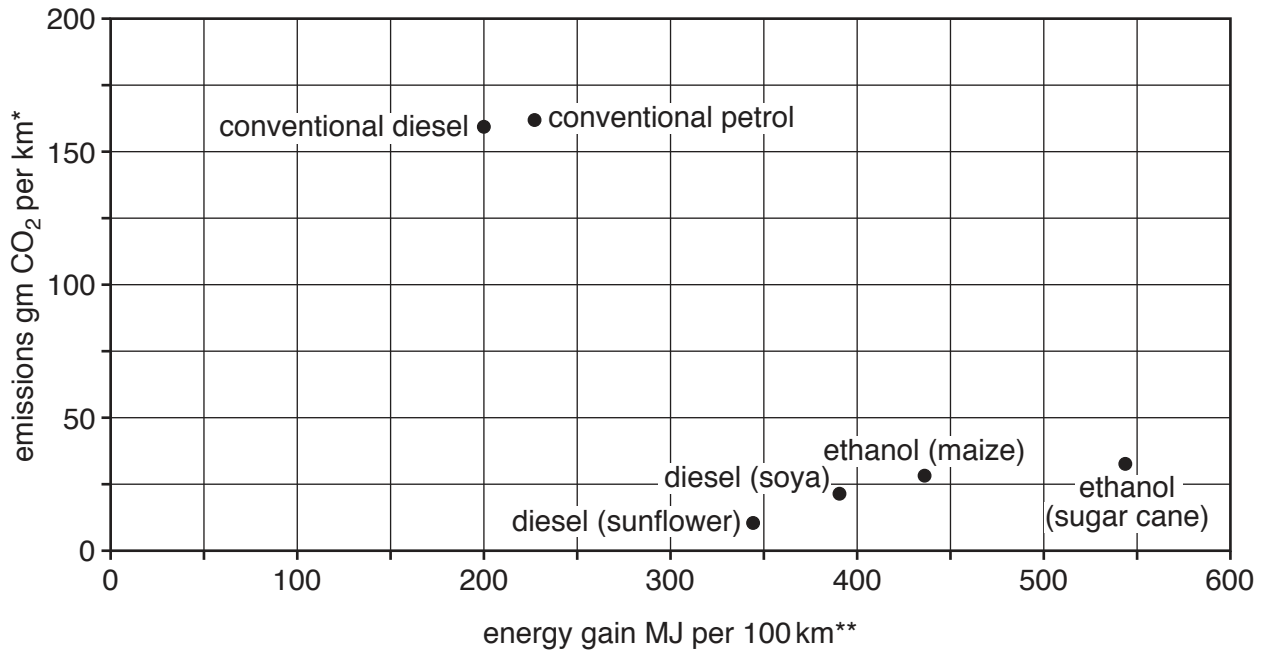


Fig. 2 for Question 3

Energy gain and carbon dioxide (CO₂) emissions for conventional fuels for motor vehicles and four biofuels



* emissions in grams of carbon dioxide per kilometre travelled

** energy gain in megajoules (million joules) per 100 kilometres travelled

Fig. 3 for Question 6

Life cycle model of the development of resorts and tourist destinations

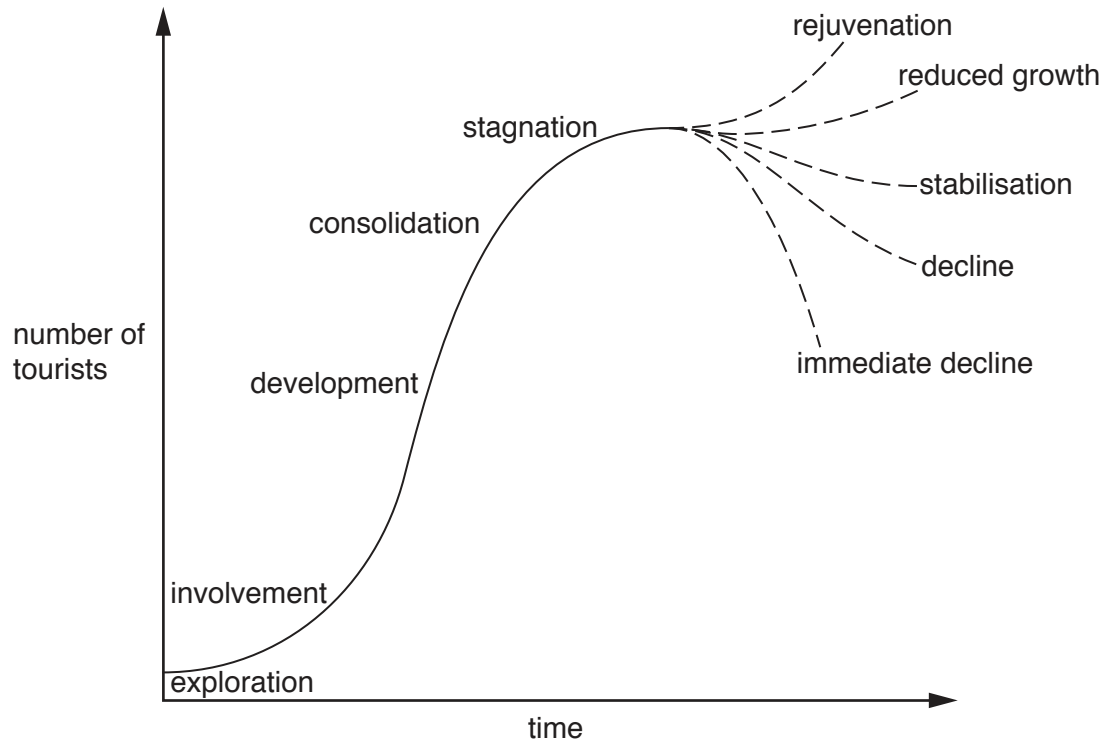


Fig. 4 for Question 7

GDP per person PPP* for countries in North Africa and the Middle East, 2012

Content removed due to copyright restrictions.

BLANK PAGE

Permission to reproduce items where third-party owned material protected by copyright is included has been sought and cleared where possible. Every reasonable effort has been made by the publisher (UCLES) to trace copyright holders, but if any items requiring clearance have unwittingly been included, the publisher will be pleased to make amends at the earliest possible opportunity.

To avoid the issue of disclosure of answer-related information to candidates, all copyright acknowledgements are reproduced online in the Cambridge International Examinations Copyright Acknowledgements Booklet. This is produced for each series of examinations and is freely available to download at www.cie.org.uk after the live examination series.

Cambridge International Examinations is part of the Cambridge Assessment Group. Cambridge Assessment is the brand name of University of Cambridge Local Examinations Syndicate (UCLES), which is itself a department of the University of Cambridge.